



INDIAN SCHOOL AL WADI AL KABIR

DEPARTMENT OF MATHEMATICS (2023–2024)

CLASS:-I

TOPIC: MONEY

WORKSHEET - 2

RESOURCE PERSON: SABINA.D

NAME: _____ SEC: _____ DATE: _____

Q1) Tick the box showing the correct currency for the amount given.


1. 50 Rials




2. 10 Rials



3. 100 Baisa













4. 5 Rials



Q2) Aron wants to buy snacks and gifts for his brother's birthday. Help him to circle the correct amount of money for each of the given items.



<p>1.</p>	 <p>5 Rials</p>		
<p>2.</p>	 <p>10 Rials</p>		
<p>3.</p>	 <p>1 Rial</p>		
<p>4.</p>	 <p>1/2 Rial</p>	